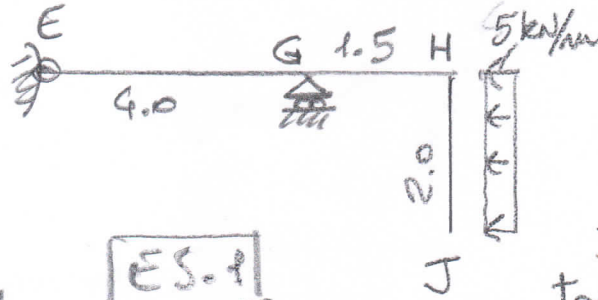
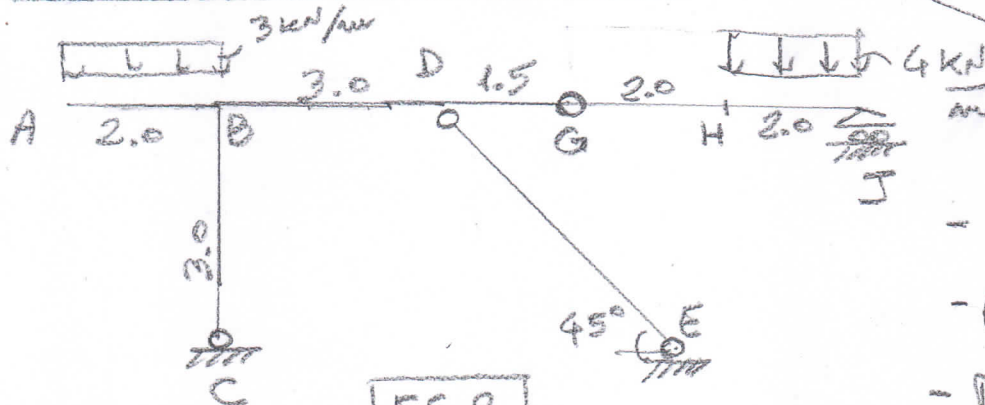


ES.1

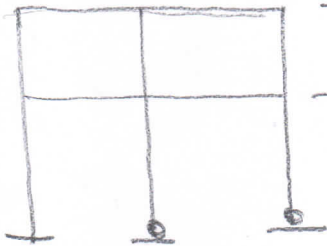


- R.V. in A, E, G
- Diagrammi quotati: N, T, M su ABCD
- Diagrammi quotati: N, T, M su EGHJ



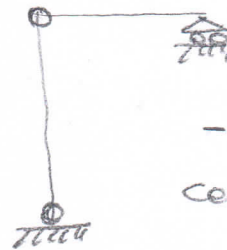
ES.2

- R.V. est. (C, E, J)
- R.V. int. (D, G)
- Diagrammi quotati di N, T, M
- Posizione e valore di M_{max} in GJ

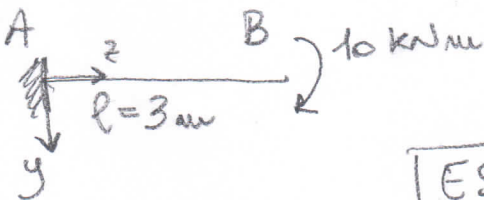


- Riconoscere strutture iperstatiche
- Se iperstatica renderle isostatiche

ES.3



- Tracciare la catena cinematica



ES.4

- Determinare d
- Calcolare I_x
- Diagramma σ_z per $M = M_{max}^{AB}$
- Indicare assi σ, m, n
- Valori di σ_z^{max} e σ_z^{min}

