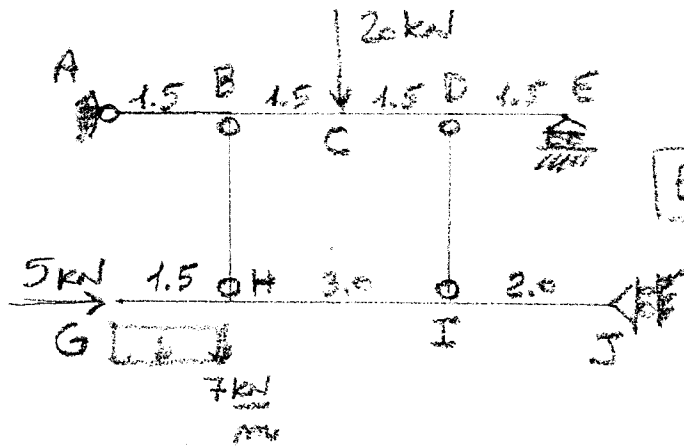


3/7/2018

COGNOME

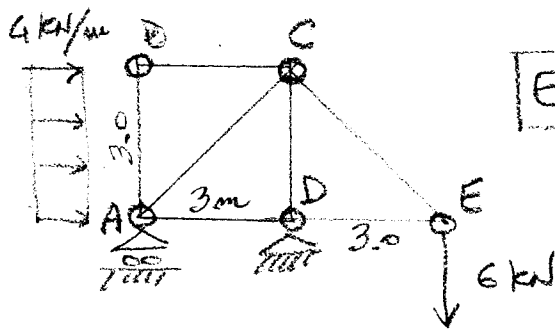
NOME



ES.1

- R.V. ext (A, E, J) e int. (B, H, D, I) col metodo sintetico

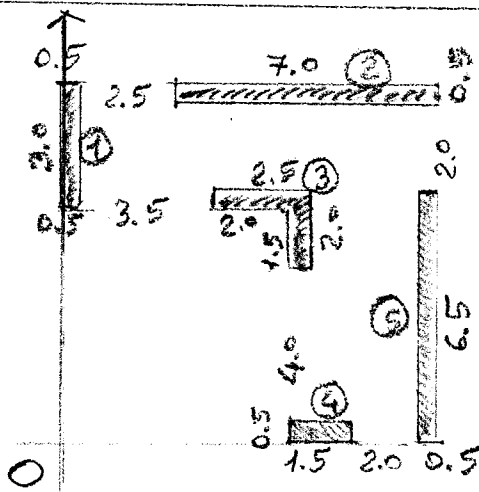
- Diagrammi N, T, M quotati



ES.2

- R.V. ext (A, D)
- N in almeno 4 aste
- N nelle rimanenti aste
- See Ritter x determinare N_{BC}

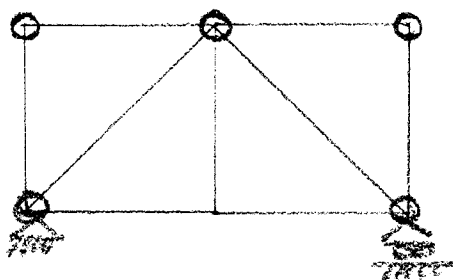
- Dec sapendo che $E = 210000 \frac{N}{mm^2}$ e $A = 7cm^2$



ES.3

- X_G, Y_G

- I_{P_G} di (3)



ES.4

- Riconoscere la struttura
- Renderla isostatica senza eliminare Tratti