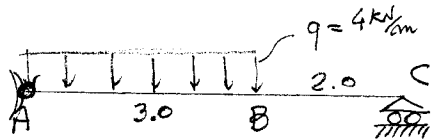
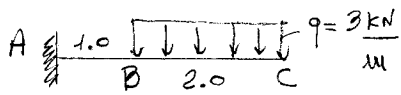


11/2/2014

COGNOME _____

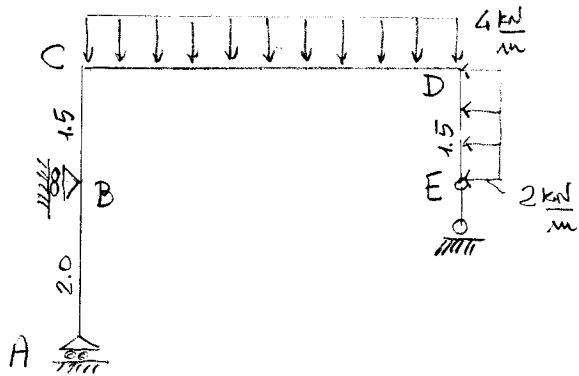
NOME _____



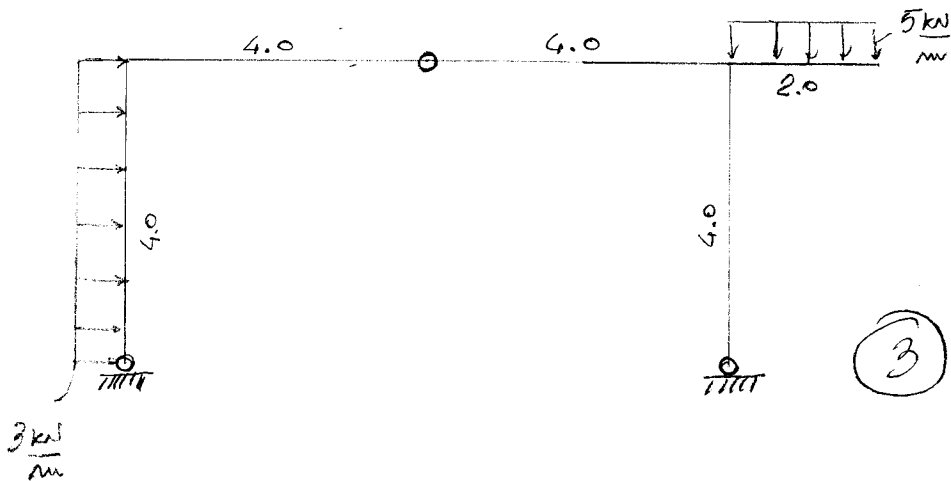
- R.V. col metodo sintetico
- Diagrammi quotati di T e M

①

②



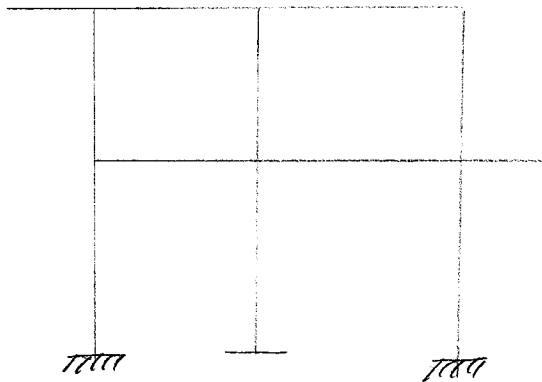
- R.V. col metodo sintetico
- Diagrammi Cds quotati
- Valore e posizione di M_{max} in CD



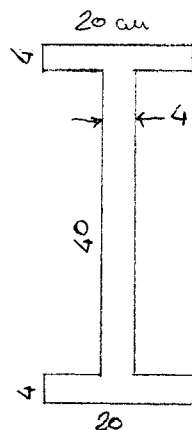
- R.V. ext e int col metodo sintetico
- Diagrammi quotati dell Cds

③

④



- Riconoscere le strutture
- Se iperstatica, renderle isostatica senza rimuovere tratti



- I_{xG}
- Dato M_z in G di valore 200 kNm:
- Disegnare n-n
- Tracciare diagramma σ_z
- Determinare σ_z^{max}
- Determinare un punto del nocciolo